
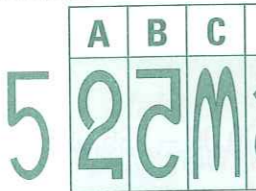




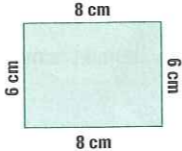




MONDAY



- The time is ten to .
- $6 + 9 =$
- Circle the composite number.
5 7 9 11 13
- $\$2.00 + \$2.50 =$
- $800 - 150 =$
- Write the only even prime number.
- $8^2 =$ x $=$
- How many faces are on a cube?
- Name this 3-D shape.

- What is the product of five and eight?
- $6 + 6 + 6 =$
- $12 > 6$ ☐ true ☐ false
- Is C the third or fourth letter of the alphabet?
- Will this shape fit into A, B, C or D?
5 
- If the date is 17 December what will the date be in one week?
- $\$1.00 - 35c =$
- $11 \times 6 =$
- Is the sun rising or setting at 6 pm?

- Write as a fraction.
- Antonio had 8 groups of model cars. In each group there were 6 cars. How many cars did Antonio have?



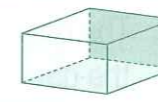


TUESDAY



- The time is ten to .
- $9 + 9 =$
- $4 \times 5 =$
- Perimeter = cm

- What is the difference between 15 and 5?

- $9^2 =$ x $=$
- Name this 3-D shape.
- $11 \times 3 =$
- Tick the direction from A to B.

North-east ☐
South-east ☐
South-west ☐
North-west ☐
- A  B
How long is line AB?
☐ 5 mm ☐ 5 cm ☐ 5 m ☐ 5 km
- 1, 4, 7, 10,
- $18 < 9 \times 3$ ☐ true ☐ false
- Is E the fifth or sixth letter of the alphabet?
- $\$1.00 - 65c =$
- Write one thousand nine hundred and seventy-nine as a numeral.
- The date is 21 December. What will the date be 7 days later?
- 1 L = mL
- In 638, what is the meaning of the 6?
- How many faces are on a triangular prism?
- Will this shape fit into A, B, C or D?



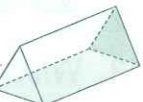


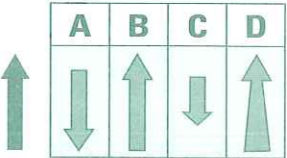
WEDNESDAY



- The time is ten to .
- $22 + 50 =$
- What is the difference between 18 and 8?
- 1 km = m
- What is the product of 6 and 5?
- A decagon has sides.
- Round 420 (nearest hundred).
- $8^2 =$ x $=$
- $4 + 4 + 4 + 4 =$
- What position is D?
F B Z D
- The month of April is in which season?
- 1 m = mm
- Is this clockwise or anticlockwise?

- Name this 3-D shape.
r 
p
- $\$5.00 + \$4.75 =$
- $650 + 150 =$
- Will this shape fit into A, B, C or D?

- $4 \div 4 =$
- $7 \times 8 =$
- $\$1.00 - 45c =$


THURSDAY



- The time is ten to .
- What is the difference between 12 and 6?
- $7 \times 3 =$
- A decagon has sides.
- $26 - 8 =$
- $3 + 8 =$
- Write as a fraction.

- 1 cm = mm
- Write two thousand two hundred and thirty as a numeral.
- Round 245 to the nearest 100.
- Name this 3-D shape.
t 
p
- $9^2 =$ x $=$
- Which shape will tessellate?
A  B 
- 1 kg = g
- A decade = years
- 4, 9, 14,
- $\$5.00 - \$1.50 =$
- Will this shape fit into A, B, C or D?

- $35 \div 7 =$
- $10 \times 10 =$
